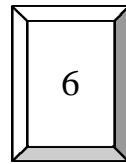
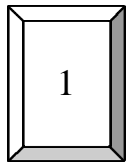
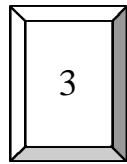


Name \_\_\_\_\_ Date \_\_\_\_\_

Here are three number cards:



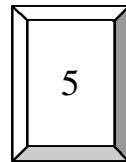
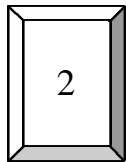
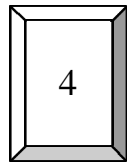
One number that can be made with the cards is 361.

What is the smallest number you can make? \_\_\_\_\_

What is the largest number you can make? \_\_\_\_\_

Make an even number with the cards. \_\_\_\_\_

Here are three number cards:



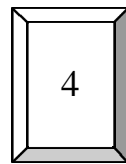
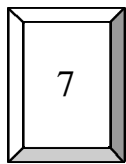
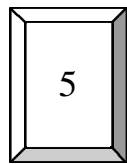
One number that can be made with the cards is 425.

What is the smallest number you can make? \_\_\_\_\_

What is the largest number you can make? \_\_\_\_\_

Make an even number with the cards. \_\_\_\_\_

Here are three number cards:



One number that can be made with the cards is 547.

What is the smallest number you can make? \_\_\_\_\_

What is the largest number you can make? \_\_\_\_\_

Make an even number with the cards. \_\_\_\_\_