

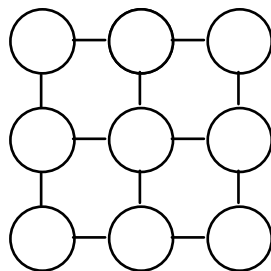
Puzzles & Problems

CONSECUTIVE numbers are numbers which follow on continuously from one another, eg. 12 and 13, or 43 and 44.

- 1) Find three consecutive numbers which add up to 39.
- 2) Find three consecutive numbers which add up to 66.

A PRODUCT is an answer that you get when you multiply two or more numbers by each other.

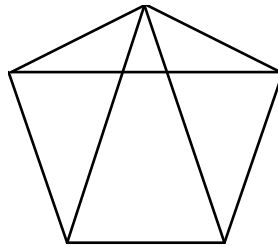
- 3) Find a pair of numbers with:
 - a) a sum of 11 and a product of 24.
 - b) a sum of 40 and a product of 400.
 - c) a sum of 15 and a product of 54.
- 4) Find three consecutive numbers with a total of 333.
- 5) Find two consecutive numbers with a product of 182.
- 6) Find two consecutive numbers with a product of 1332.
- 7) Find two numbers with a product of 899.
- 8) Arrange the numbers 1, 2, 3, 4, 5, 6, 7, 8 and 9 in the circles so that each side of the square adds up to 12.



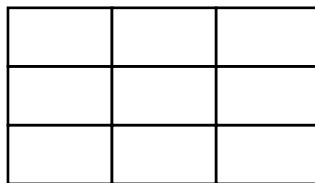
9) Draw three rings. Use each of the numbers from 1 to 9. Write them in the rings so that each ring has a total of 15.

10) How many different rectangles can you make using 12 squares on your page?
Draw them.

11) Count all the triangles in this diagram and draw them:



12) Count all the rectangles in this diagram and draw them:

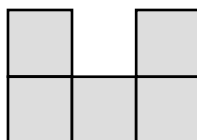


[N.B. there are probably more than you think! - more than 20]

13) Copy & complete this multiplication table:

x		4	9	
		8	18	
3		12		
	35			14
				2

14) This is half a shape:



Sketch some of the different whole shapes the original could have been. Mark any line of symmetry of these shapes.