

## Practice Exam Questions – Level 1, Adult Numeracy.

### Level 1 Adult Numeracy questions: percentages.

Allow about 20 minutes.

You may NOT use a calculator. Bilingual dictionaries may be used.

#### Level 1 – N2. Percentages

**N2/L1.3** identify equivalencies between common fractions, decimals and percentages (e.g.  $50\% = \frac{1}{2}$ ,  $0.25 = \frac{1}{4}$ ) a) know common fraction equivalents e.g. halves quarters, fifths, tenths.

**N2/L1.8** read, write, order and compare simple percentages, and understand simple percentage increase and decrease (a) understand percentage as the number of parts in every 100 (b) know that 100% is the whole (c) understand that a 10% pay increase is more than a 5% pay increase, but the actual increase depends on the number operated on.

**N2/L1.9** find simple percentage parts of quantities and measurements (a) understand that there are different ways of calculating percentages (b) understand that knowing a range of methods for use with different numbers can make life easier than a single method applied to all numbers (but the choice remains the learner's).

**N2/L1.10** find simple percentage increase and decrease (a) understand that a percentage increase can be found by finding the percentage part & adding on (b) that a percentage decrease can be found by finding the percentage part and subtracting.

1. A supermarket had 444 customers in one morning. Of these, 111 were men.

What percentage of the customers were men?

A 14%

B 20%

C 25%

D 44%



2. In 1999 a supermarket chain made £50 million in profit

In 2000 the supermarket chain only made £40 million in profit.

What percentage of the 1999 profit is this?

A 10%

B 40%

C 80%

D 90%

3. The table shows the number of people who attend different showings of a film.

2:30pm	4:30pm	7:00pm	9:30pm
150	175	225	250



The cinema manager expects 40% of people who attend the 9:30pm show to buy a bag of popcorn. How many bags of popcorn does he expect to sell at this showing?

A 40

B 80

C 100

D 120

4. 13 of 50 patients in a local hospital had broken bones.  
What percentage of the patients is this?

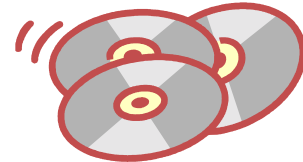


- A 13%
- B 20%
- C 26%
- D 50%

5. Twenty percent of the CDs in a collection are Jazz.

How much of the collection is Jazz?

- A A little less than a quarter
- B A little more than a quarter
- C A little less than a half
- D A little more than half



6. 2 000 people were asked whether they chose to use 'Soapsuds' or 'Greenclean' to do their washing up. 75% chose 'Greenclean'

How many people chose 'Greenclean'?

- A 75
- B 150
- C 750
- D 1500

7. This question is about rides in a theme park  
7500 rides were taken on a Thursday  
The number of rides taken on a Friday is only 20% of Thursday's total.

How many rides are taken on a Friday?

- A 200
- B 750
- C 1500
- D 3750



8. Maria is keeping a check on the drinks sold in the staff canteen at morning break.  
Later in the week Maria sold a total of 50 drinks during a morning break.  
Three tenths of the drinks were tea.


What is three tenths as a percentage?

- A 30%
- B 15%
- C 10%
- D 3%

9. There are 28 people at a celebration meal. 25% of them are vegetarians.  
The number of people who are vegetarians is

- A 7
- B 10

- C 21
- D 25



10. Eighty children attend a nursery. 20% of them attend full-time.  
How many children attend full-time?

- A 10
- B 16

- C 20
- D 14


11. A recent study found that 60% of all new and returning exercisers dropped their exercise plans within 6 months.  
Out of 200 people who started an exercise plan, how many dropped out?

- A 60
- B 120

- C 66
- D 112



12. There are three types of chocolates in a box. White chocolates, milk chocolates and plain chocolates. The box contains 50 chocolates. 30% are plain chocolate and 30% are white chocolate.  
What percentage of the chocolates are milk chocolates?



- A 60%
- B 50%

- C 10%
- D 40%

13. A TV set costs £300. The price is reduced by 25% in a sale. What is the sale price of the television?

- A £75
- B £225

- C £275
- D £375

-----  
**Answers**

1	2	3	4	5	6	7
8	9	10	11	12	13	Total

**Tutor Comments**

## Answer sheet

### Level 1 Percentage questions

- |    |   |                                |
|----|---|--------------------------------|
| 1  | – | C 25%                          |
| 2  | – | C 80%                          |
| 3  | – | C 100                          |
| 4  | – | C 26%                          |
| 5  | – | A A little less than a quarter |
| 6  | – | D 1500                         |
| 7  | – | C 1500                         |
| 8  | – | A 30%                          |
| 9  | – | A 7                            |
| 10 | – | B 16                           |
| 11 | – | B 120                          |
| 12 | – | D 40%                          |
| 13 | – | B £225                         |

Allow about 20 minutes.